



Assignment 3: Write in the remaining notes of each scale. Remember...major scales ascend and descend in alphabetical order. Play each scale to make sure it sounds correct. Hint - each major scale has a unique number of sharp's or flats. For example, C is the only major scale with no sharps or flats, G is the only major scale with one sharp, etc..

Root 2nd 3rd 4th 5th 6th 7th Root




C D E F G A B C

A musical staff in treble clef showing the first eight notes of a C major scale: C (root), D (2nd), E (3rd), F (4th), G (5th), A (6th), B (7th), and C (root). Each note is a quarter note with a stem pointing up.




G

A musical staff in treble clef with a G note on the first line (root) and an empty staff for the remaining notes.



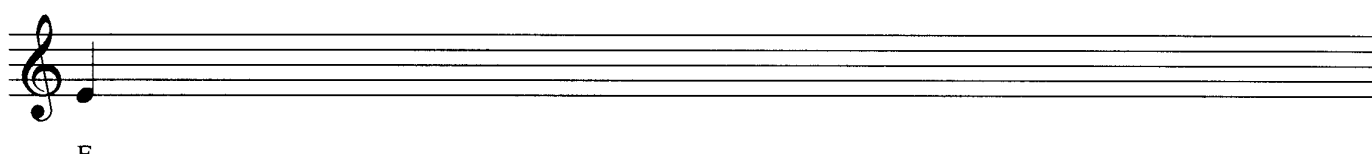
D

A musical staff in treble clef with a D note on the second line (root) and an empty staff for the remaining notes.




A

A musical staff in treble clef with an A note on the third line (root) and an empty staff for the remaining notes.




E

A musical staff in treble clef with an E note on the fourth line (root) and an empty staff for the remaining notes.



B

A musical staff in treble clef with a B note on the fifth line (root) and an empty staff for the remaining notes.



F#

A musical staff in treble clef with a key signature of one sharp (F#) and an F# note on the first space (root) and an empty staff for the remaining notes.



F

A musical staff in treble clef with an F note on the first space (root) and an empty staff for the remaining notes.



Bb

A musical staff in treble clef with a key signature of two flats (Bb) and a Bb note on the second space (root) and an empty staff for the remaining notes.